

Counting Coins

Pennies



= 1¢

1 2 3 4 5 6 7 8 9 10 11 12

Nickels



= 5¢

5 10 15 20 25 30 35 40 45 50

Dimes



= 10¢

10 20 30 40 50 60 70 80 90 100

Quarters



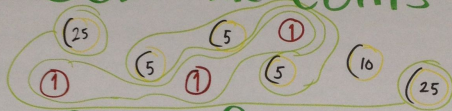
= 25¢

25 50 75 100


Counting Money

¢ Cents penny nickel dime quarter \$ dollar

1. Sort the coins



2. Order from greatest to least



3. Count the amount


25, 50, 60, 65, 70, 75, 76, 77, 78

4. Write the amount

78¢ ←

One way to obtain money
is by **earning** an income.

* income: money
received for goods or
services



★ We have to
make choices about
what to do with
our income! ★

Spend or Save?

Fish Life Cycle

